

Name : _____

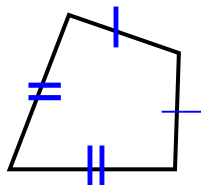
Score : _____

Teacher : _____

Date : _____

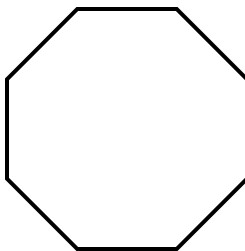
Identify the Type For Each Regular Polygon.

1)



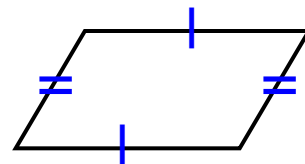
Type: _____

2)



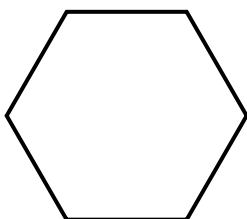
Type: _____

3)



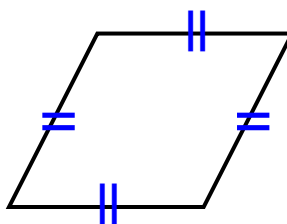
Type: _____

4)



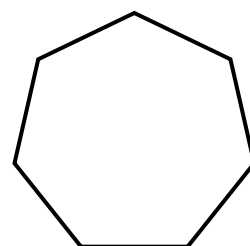
Type: _____

5)



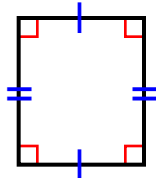
Type: _____

6)



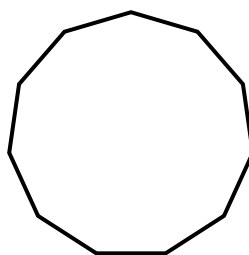
Type: _____

7)



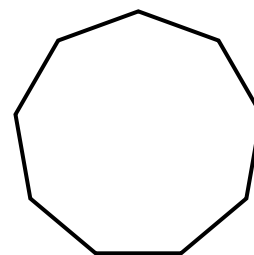
Type: _____

8)



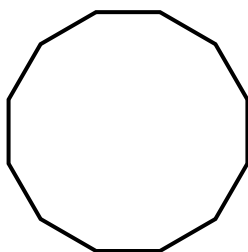
Type: _____

9)



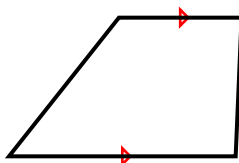
Type: _____

10)



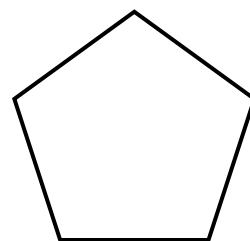
Type: _____

11)



Type: _____

12)



Type: _____

Name : _____

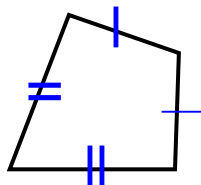
Score : _____

Teacher : _____

Date : _____

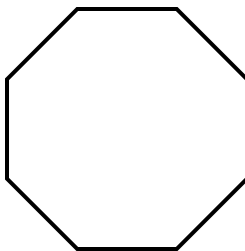
Identify the Type For Each Regular Polygon.

1)



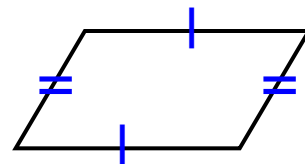
Type: Kite

2)



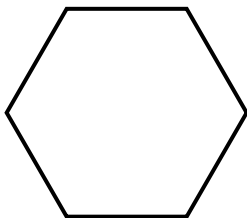
Type: Octagon

3)



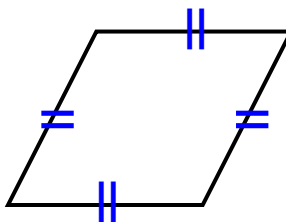
Type: Parallelogram

4)



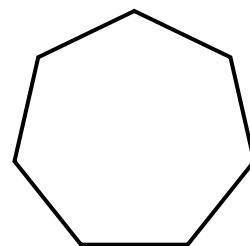
Type: Hexagon

5)



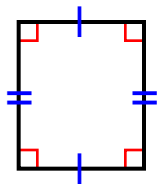
Type: Rhombus

6)



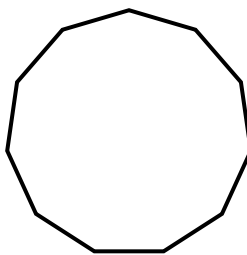
Type: Heptagon

7)



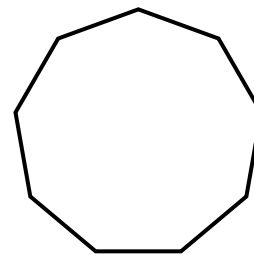
Type: Rectangle

8)



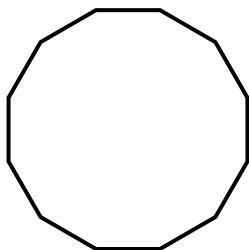
Type: Hendecagon

9)



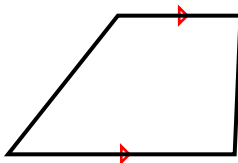
Type: Nonagon

10)



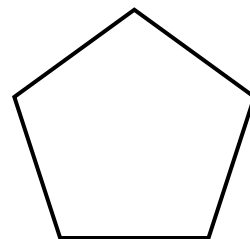
Type: Dodecagon

11)



Type: Trapezoid

12)



Type: Pentagon